


Name _____

The Bunny



The bunny likes to hop.
He hops by the flower.



He hops by the tree.



He hops on the grass.

He has eggs for me!



1. The bunny has _____ for me.

- A. flowers
- B. grass
- C. eggs

2. The bunny hops on the _____.

- A. eggs
- B. grass
- C. flowers

3. The bunny likes to _____.

- A. hop
- B. run
- C. swim

Name _____

The Girl and Her Horse

This girl has a big
apple for her horse.



The horse likes the apple.

The girl loves her horse!

1. The apple is for _____.
- A. the girl
 - B. the horse
 - C. mom

2. The girl loves _____.
- A. her apple
 - B. her horse
 - C. her hat

3. The apple is _____.
- A. little
 - B. big
 - C. green

Name _____

The Bus

The bus is here.
It is big. I can
go on the bus.



1. The _____ is here.

- A. van
- B. bus
- C. car

2. The bus is _____.

- A. little
- B. green
- C. big

3. I can _____ on the bus.

- A. run
- B. jump
- C. go

-am

Tam Likes Jam



Tam likes jam.

Tam likes ham.

She likes to eat jam and ham.

Here, Tam, get some jam.

Here, Tam, get some ham.

Do you like yams?

No, Tam likes jam and ham.

1. Tam likes _____.

- buns
- eggs
- jam

2. Does Tam like yams?

- yes
- no

3. Tam likes _____.

- eggs
- ham
- buns

4. Who likes jam?

.....

Name _____

ake

A Big Cake

Wake up, Jake! Let's bake a cake. We make a cake. The cake is big. We take the cake to the lake. Jake and I like cake.

We make a _____.

- lake
- cake
- rake

The cake is _____.


- big
- little
- bad



Name _____

Counting by Fives!

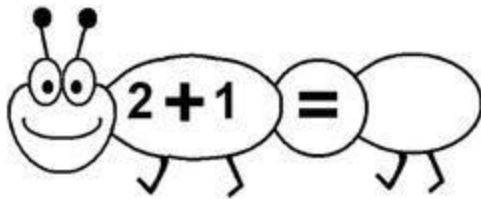
Write the missing numbers inside of the popsicles!

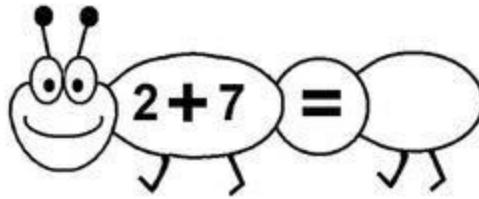


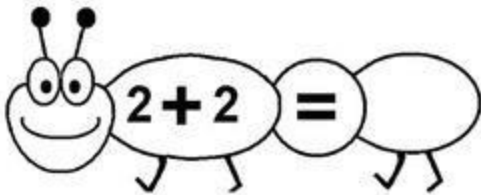
Name

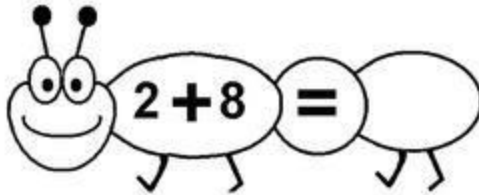
Date

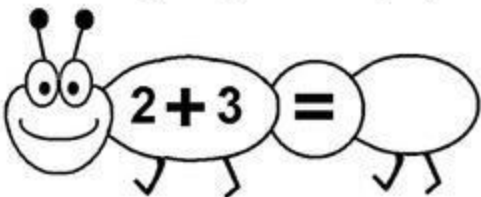
Addition

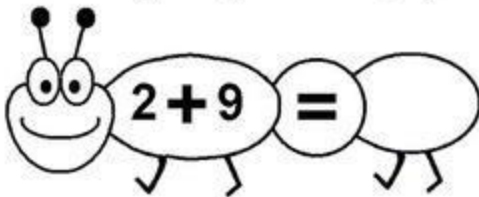
 $2 + 1 = \bigcirc$

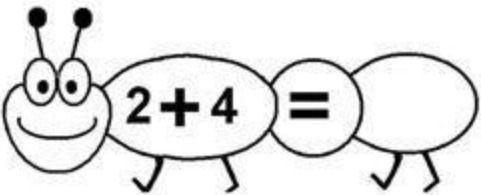
 $2 + 7 = \bigcirc$

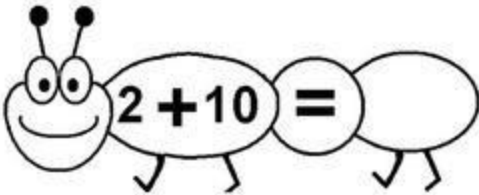
 $2 + 2 = \bigcirc$

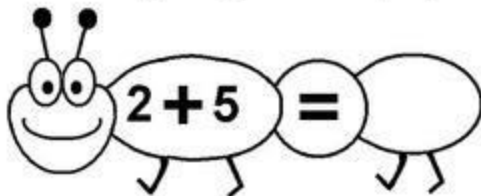
 $2 + 8 = \bigcirc$

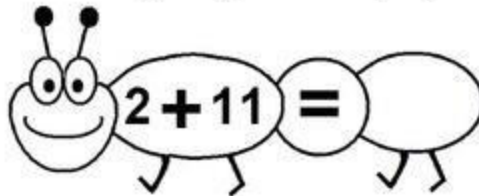
 $2 + 3 = \bigcirc$

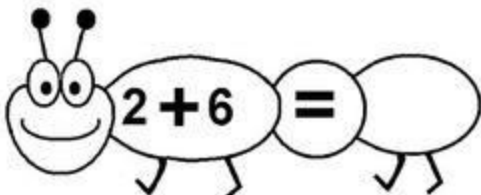
 $2 + 9 = \bigcirc$

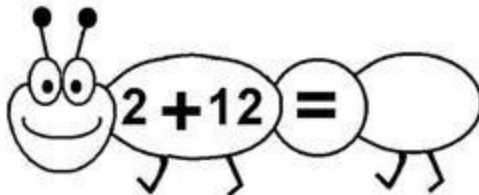
 $2 + 4 = \bigcirc$

 $2 + 10 = \bigcirc$


 $2 + 5 = \bigcirc$

 $2 + 11 = \bigcirc$

 $2 + 6 = \bigcirc$

 $2 + 12 = \bigcirc$

Addition




2

+



3

=




4

+



2

=



4

+



3

=



2

+



2

=



Addition



2

+



3

=



4

+



2

=



4

+



3

=



5

+



2

=



Name: _____

Count, add and write the sum in the box

$$\begin{array}{|c|} \hline \text{2 apples} \\ \hline \end{array} + \begin{array}{|c|} \hline \text{3 apples} \\ \hline \end{array} = \begin{array}{|c|} \hline \\ \hline \end{array}$$

$$\begin{array}{|c|} \hline \text{2 apples} \\ \hline \end{array} + \begin{array}{|c|} \hline \text{1 apple} \\ \hline \end{array} = \begin{array}{|c|} \hline \\ \hline \end{array}$$

$$\begin{array}{|c|} \hline \text{1 apple} \\ \hline \end{array} + \begin{array}{|c|} \hline \text{1 apple} \\ \hline \end{array} = \begin{array}{|c|} \hline \\ \hline \end{array}$$

$$\begin{array}{|c|} \hline \text{2 apples} \\ \hline \end{array} + \begin{array}{|c|} \hline \text{2 apples} \\ \hline \end{array} = \begin{array}{|c|} \hline \\ \hline \end{array}$$

$$\begin{array}{|c|} \hline \text{4 apples} \\ \hline \end{array} + \begin{array}{|c|} \hline \text{1 apple} \\ \hline \end{array} = \begin{array}{|c|} \hline \\ \hline \end{array}$$